

Archer's Blue Car Driving School Learner's Test Prep Practice Test



Reference:

All questions in this practice test are based on the Alberta Driver's Guide: Cars and Light Trucks

To get the latest version of the guide please visit the Alberta Transportation website:

<https://www.alberta.ca/driver-guides-overview-and-pdf-versions>

The key to being successful with the learner's test is to study this guide



QUIZ TIME!!!!

This quiz is meant to simulate the Knowledge Test.

To go for a test, you need to go a registry office and pay the test fee which is about \$20.

Make sure you bring valid government issued ID and glasses if you need them.

To pass the test, you need to correctly answer 24 of 30 random questions from a possible 200+ questions database. No test is exactly the same.

The test is multiple choice. Make sure you read the questions carefully and all the answers.

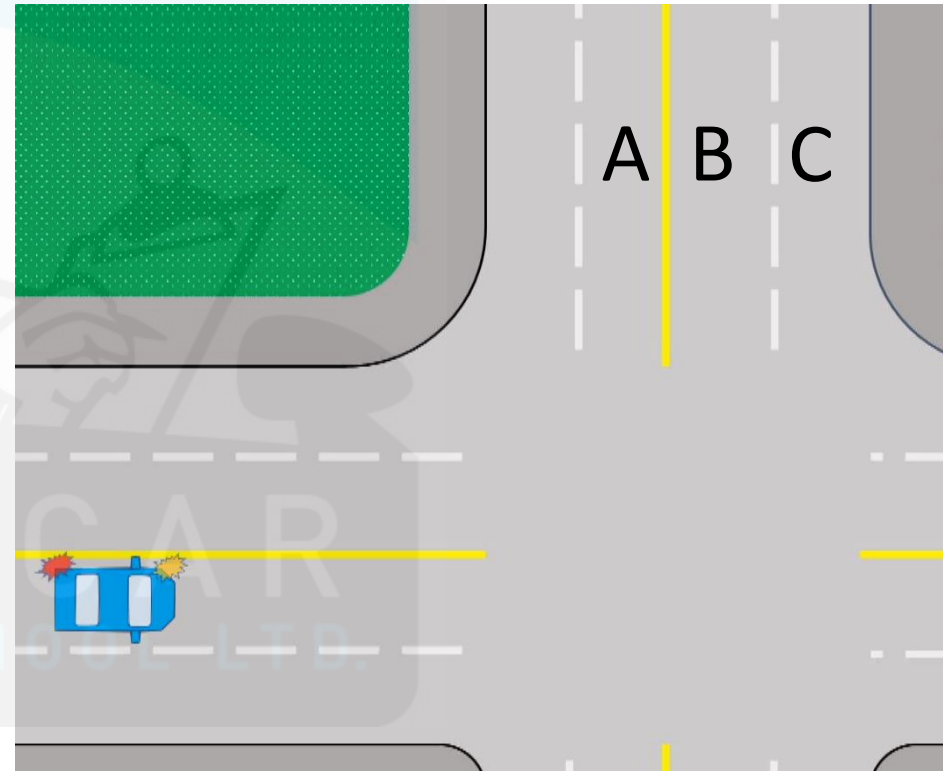
When encountering questions where municipal rules might be different than provincial rules, always answer with the provincial rules. Example: What is the speed limit in urban areas? The provincial speed limit in urban areas is 50 KPH but in many municipalities, like Edmonton, it's 40KPH, so the correct answer for the test would be 50.

The test is 45 minutes long, so don't rush!

1

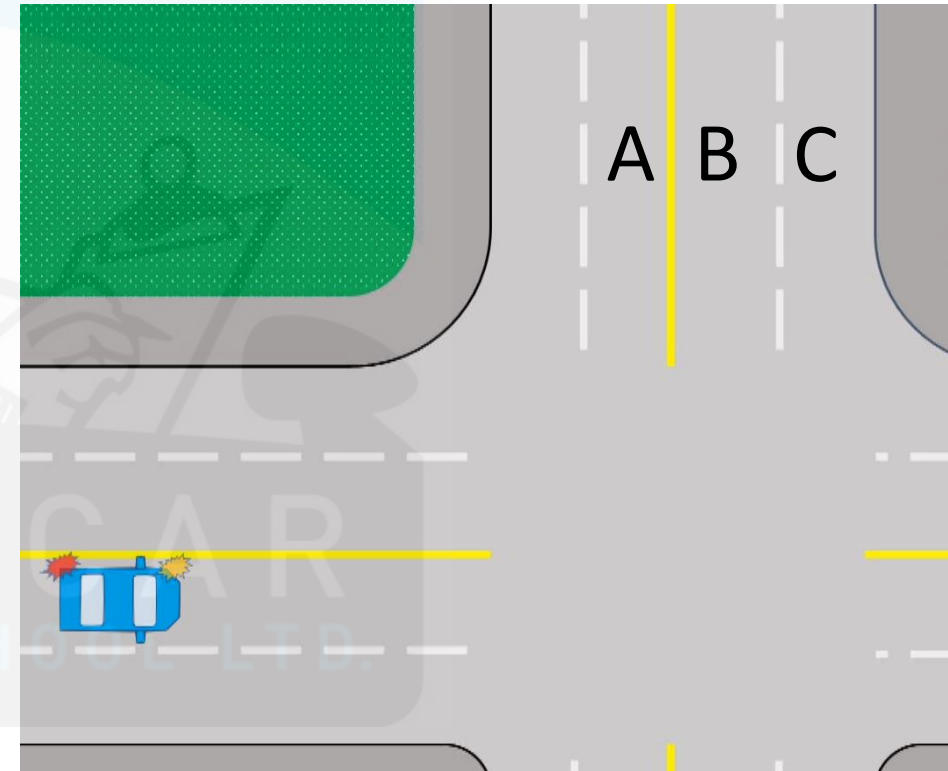
You are planning on turning left. What lane will you turn into?

- A. Left of the yellow line
- B. Right of the yellow line
- C. Right of the white line
- D. B and C are correct



You are planning on turning left. What lane will you turn into?

- A. Left of the yellow line
- B. Right of the yellow line
- C. Right of the white line
- D. B and C are correct

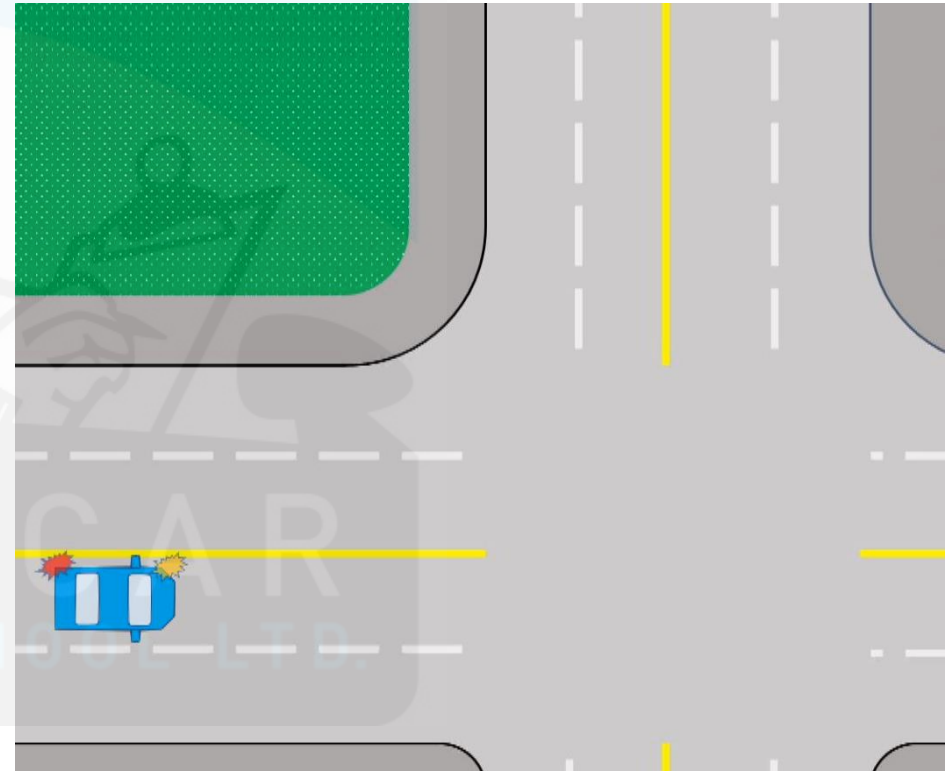


Reference: Chapter 4 Intersections and Turns

2

You are planning on turning left at the intersection and must yield to oncoming traffic. Where should the car be and where should the wheels be pointed?

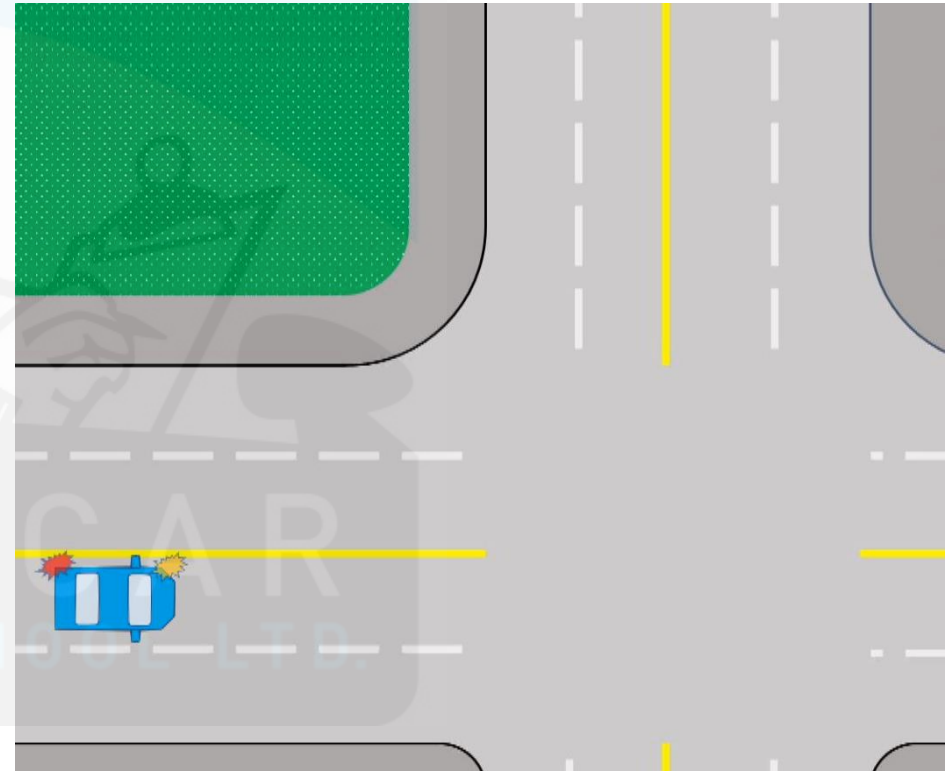
- A. Inside the intersection pointing left
- B. Outside the intersection pointing straight
- C. Inside the intersection pointing straight
- D. Outside the intersection pointing left



2

You are planning on turning left at the intersection and must yield to oncoming traffic. Where should the car be and where should the wheels be pointed?


- A. Inside the intersection pointing left
- B. Outside the intersection pointing straight
- C. Inside the intersection pointing straight
- D. Outside the intersection pointing left



3

You are planning to turn right at a red light, what do you do?

- A. Slow down and proceed if it's safe
- B. Stop and wait for the green light
- C. Stop and proceed after yielding to traffic and pedestrian
- D. Do a rolling stop




BLUE CAR
DRIVING SCHOOL LTD.

3

You are planning to turn right at a red light, what do you do?

- A. Slow down and proceed if it's safe
- B. Stop and wait for the green light
- C. Stop and proceed after yielding to traffic and pedestrian
- D. Do a rolling stop



Reference: Chapter 2 Traffic Control


What does this sign mean?

- A. This lane can go straight only
- B. This lane turns into a left turning lane
- C. This lane can only turn left
- D. This lane can go straight or turn left



What does this sign mean?

- A. This lane can go straight only
- B. This lane turns into a left turning lane
- C. This lane can only turn left
- D. This lane can go straight or turn left



Reference: Chapter 2 Traffic Control

Which of these times are not part of School Zone hours

- A. 8:00 a.m. – 9:30 a.m.
- B. 11:30 a.m. – 1:30 p.m.
- C. 3:00 p.m. – 4:30 p.m.
- D. 8:00 a.m.- 4:00 p.m.



BLUE CAR
DRIVING SCHOOL LTD.

Which of these times are not part of School Zone hours

- A. 8:00 a.m. – 9:30 a.m.
- B. 11:30 a.m. – 1:30 p.m.
- C. 3:00 p.m. – 4:30 p.m.
- D. 8:00 a.m.- 4:00 p.m.

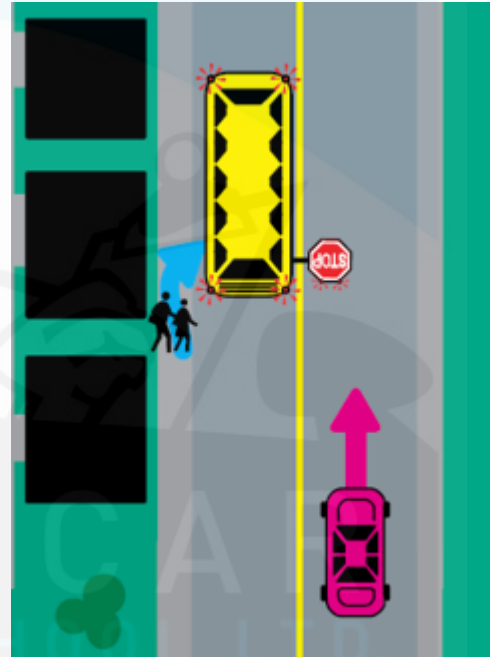


Reference: Chapter 2 Traffic Control

6

There is a school bus with red flashing lights on. How far away should you stop?

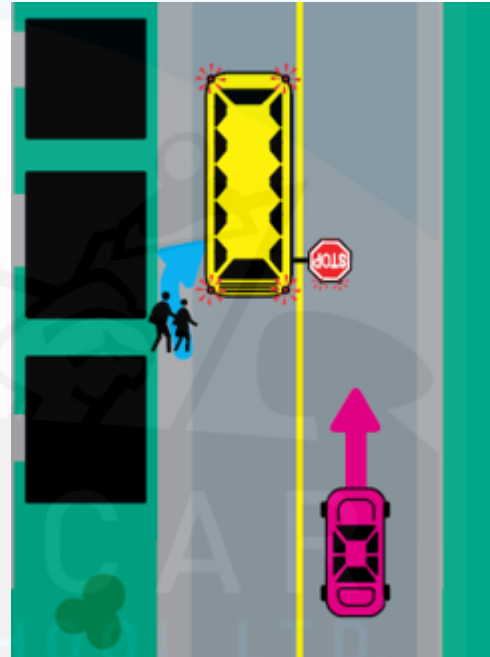
- A. 10m
- B. 5m
- C. 20m
- D. 25m



6

There is a school bus with red flashing lights on. How far away should you stop?

- A. 10m
- B. 5m
- C. 20m
- D. 25m

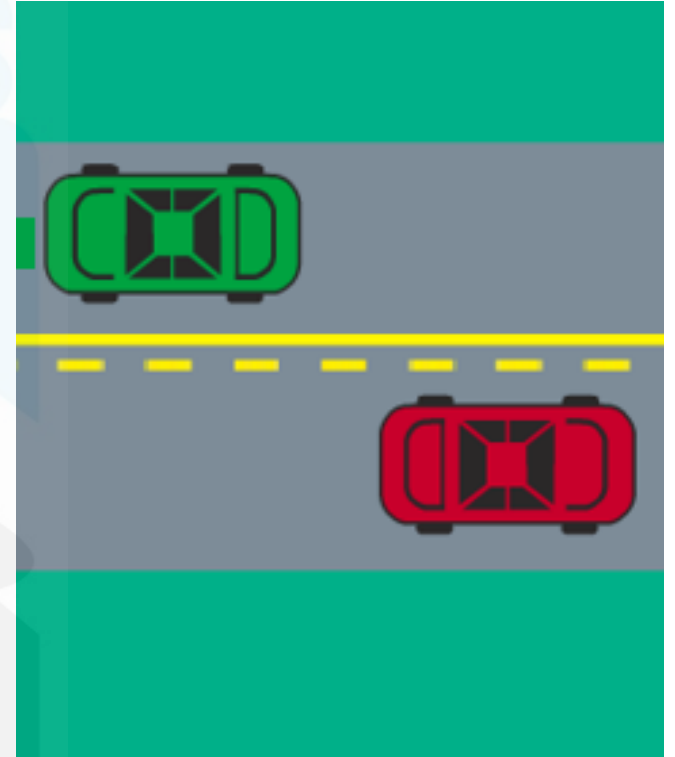


Reference: Chapter 8 Sharing the Road

7.

Which statement is true?

- A. Only the red car is allowed to pass other cars
- B. Only the Green car is allowed to pass other cars
- C. Both cars are allowed to pass
- D. Neither car is allowed to pass

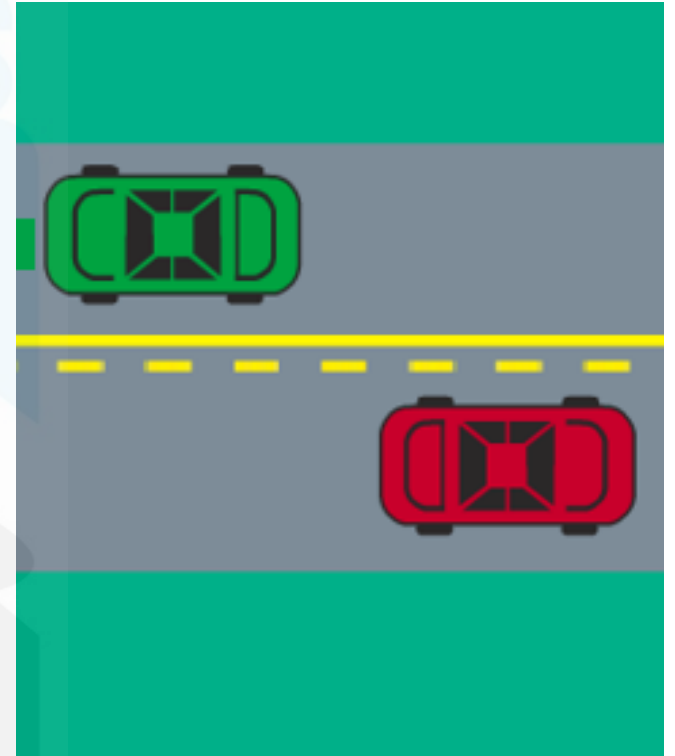


BLUE CAR
DRIVING SCHOOL LTD.

7.

Which statement is true?

- A. Only the red car is allowed to pass other cars
- B. Only the Green car is allowed to pass other cars
- C. Both cars are allowed to pass
- D. Neither car is allowed to pass

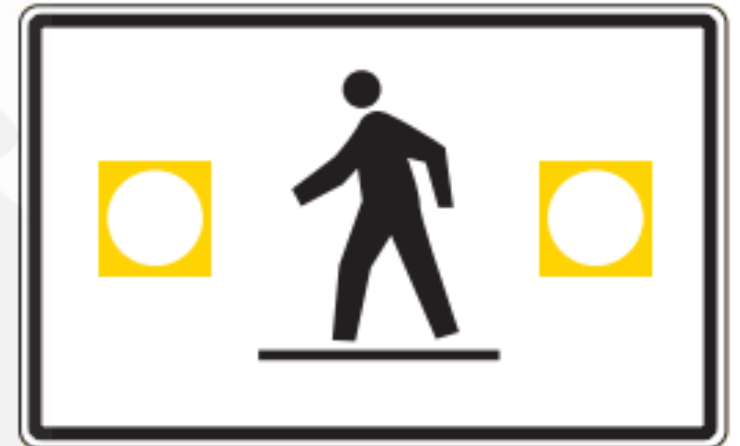


Reference: Chapter 2 Traffic Control

8.

At a marked crosswalk with flashing light a driver must:

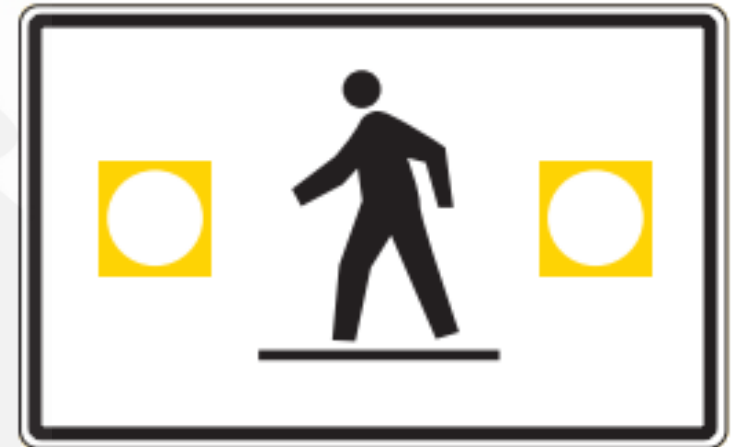
- A. Slow down to 30 KPH and yield to all pedestrian, do not speed up until past the crosswalk or lights are done flashing
- B. Continue at the posted speed limit and yield to pedestrian
- C. Continue, pedestrians must yield to vehicles
- D. Slow down to 30 KPH and yield to all pedestrian, speed up if the crosswalk is clear.



8.

At a marked crosswalk with flashing light a driver must:

- A. Slow down to 30 KPH and yield to all pedestrian, do not speed up until past the crosswalk or lights are done flashing
- B. Continue at the posted speed limit and yield to pedestrian
- C. Continue, pedestrians must yield to vehicles
- D. Slow down to 30 KPH and yield to all pedestrian, speed up if the crosswalk is clear.

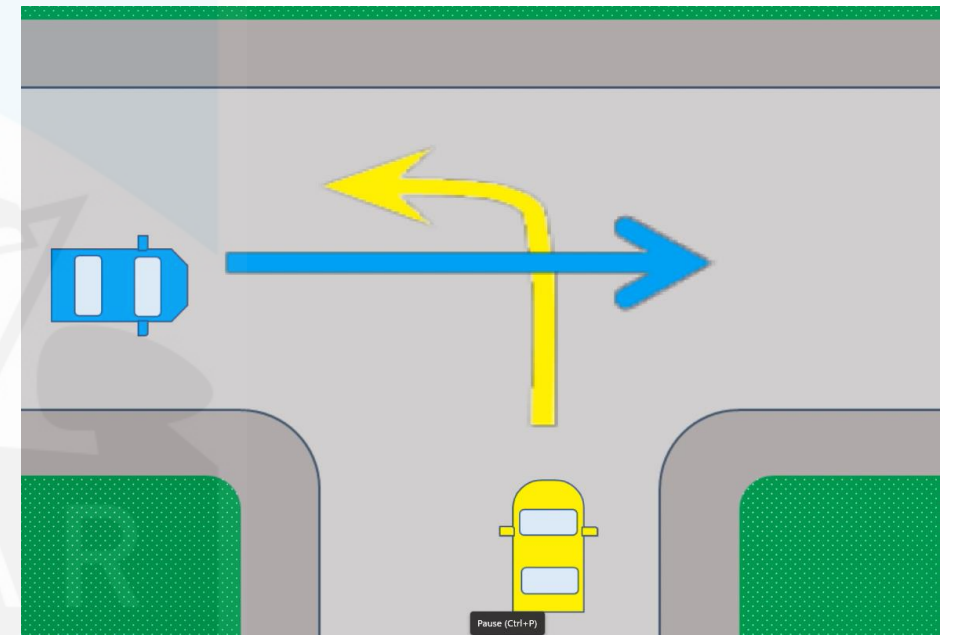


Reference: Chapter 2 Traffic Control

9.

Who has the right of way at an uncontrolled intersection:

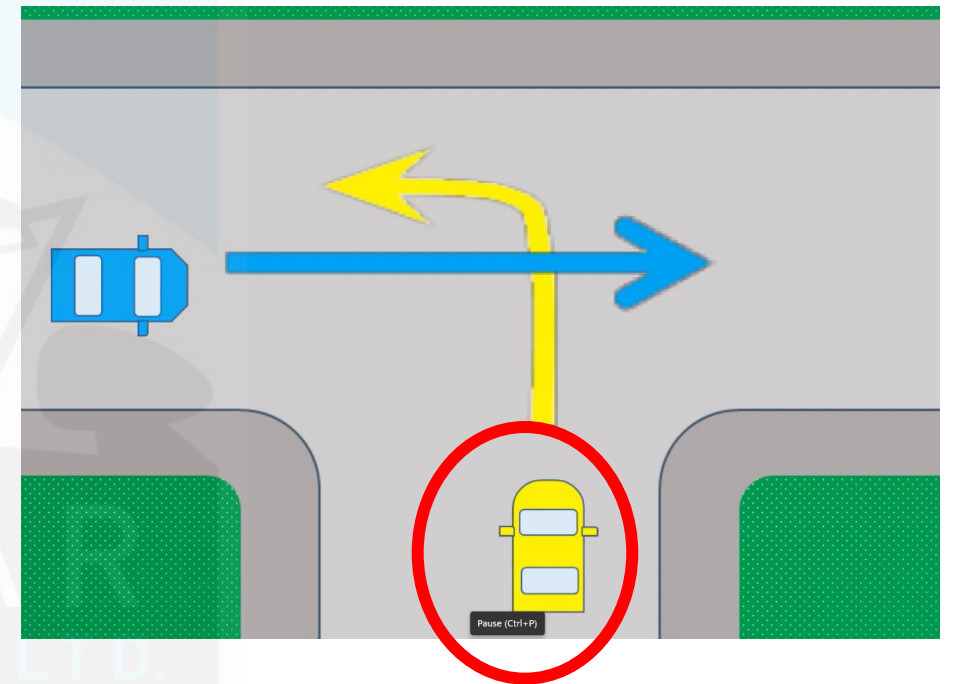
- A. The car on the right
- B. The bigger vehicle
- C. The car on the left
- D. The car that is going straight



9.

Who has the right of way at an uncontrolled intersection:

- A. The car on the right
- B. The bigger vehicle
- C. The car on the left
- D. The car that is going straight



Reference: Chapter 4 Intersections and Turns

10.

What does this sign mean:

- A. There is a stop sign ahead
- B. Stop
- C. There might be a stop sign ahead
- D. The stop sign is missing



BLUE CAR
DRIVING SCHOOL LTD.

10.

What does this sign mean:

- A. There is a stop sign ahead
- B. Stop
- C. There might be a stop sign ahead
- D. The stop sign is missing



Reference: Chapter 2 Traffic Control

11.

How far should you dim your high beam headlights:

- A. 300m following and approaching
- B. 300m approaching, 150m following
- C. 150m following and approaching
- D. When the other driver flashes their headlights

Approaching



Following



11.

Reference: Chapter 6 Challenging Conditions

How far should you dim your high beam headlights:

- A. 300m following and approaching
- B. 300m approaching, 150m following
- C. 150m following and approaching
- D. When the other driver flashes their headlights

Approaching



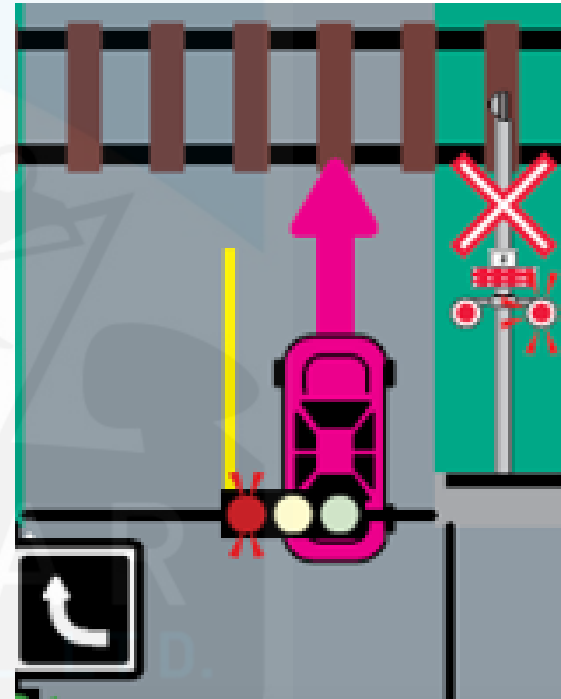
Following



12

How far should a vehicle stop from railway tracks:

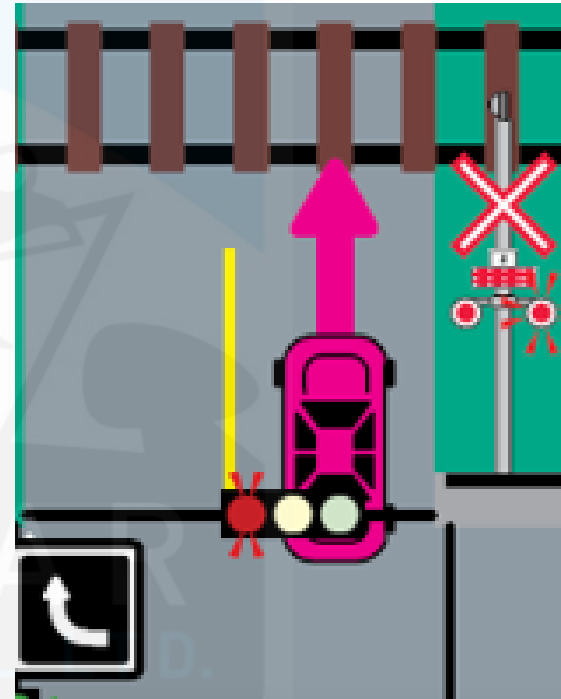
- A. 7m from the nearest track
- B. 10m from the furthest track
- C. 5m from the nearest track
- D. 5m from the furthest track



12

How far should a vehicle stop from railway tracks:

- A. 7m from the nearest track
- B. 10m from the furthest track
- C. 5m from the nearest track
- D. 5m from the furthest track

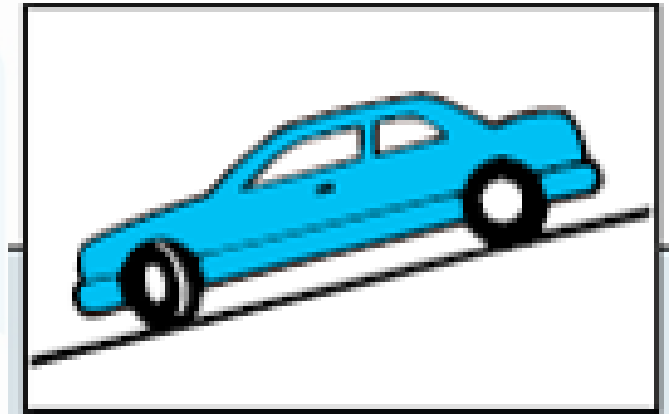


Reference: Chapter 8 Sharing the Road

13.

When parking on a downhill slope with a curb, the front tires must be:

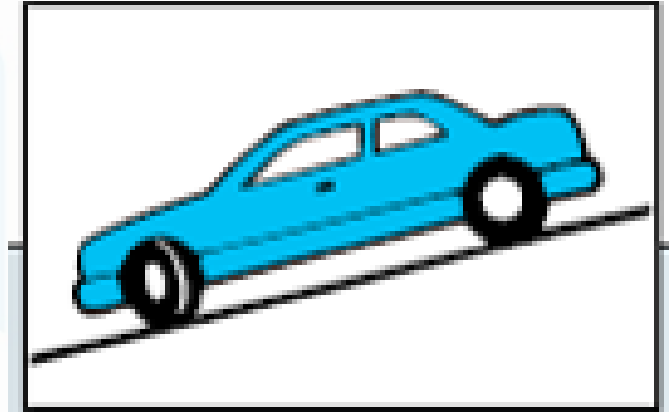
- A. Turned to the right (away from traffic) and touching the curb
- B. Turned to the left (towards traffic) and touching the curb
- C. Straight running parallel to the curb within 50cm
- D. Turned to the right (away from traffic) within 50cm



13.

When parking on a downhill slope with a curb, the front tires must be:

- A. Turned to the right (away from traffic) and touching the curb
- B. Turned to the left (towards traffic) and touching the curb
- C. Straight running parallel to the curb within 50cm
- D. Turned to the right (away from traffic) within 50cm

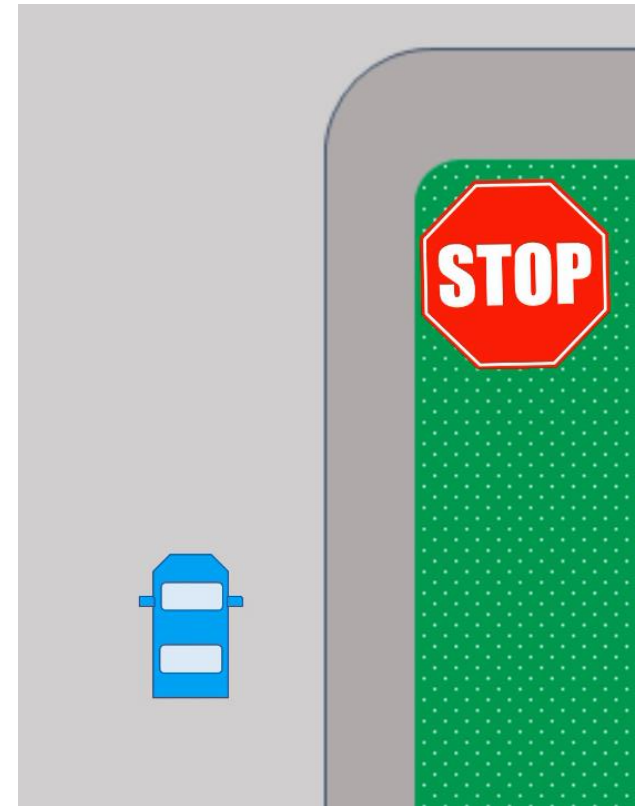


Reference: Chapter 3 Basics of Driving

14.

Where should cars stop at an intersection with a stop sign:

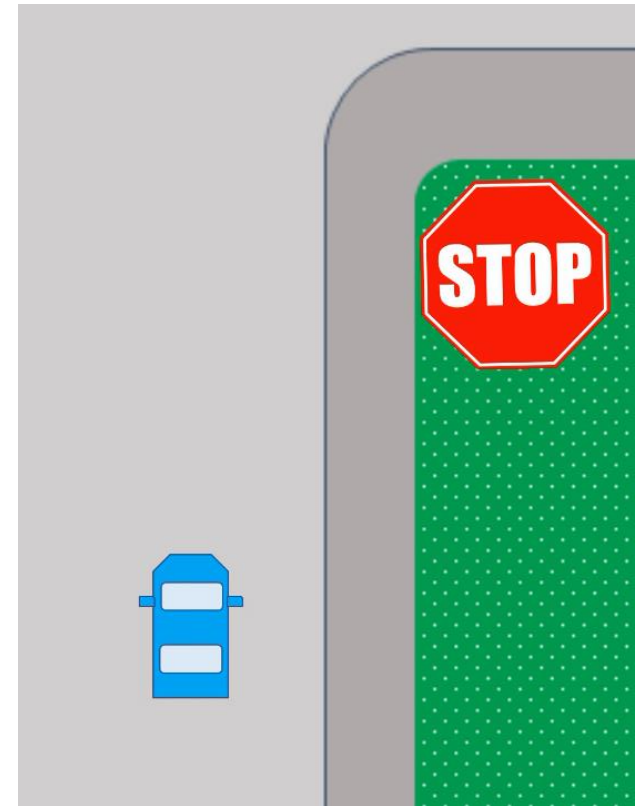
- A. At the stop sign
- B. Within 3m from the edge of the intersection
- C. Until you can look for oncoming cars
- D. Within 5m from the intersection



14.

Where should cars stop at an intersection with a stop sign:

- A. At the stop sign
- B. **Within 3m from the edge of the intersection**
- C. Until you can look for oncoming cars
- D. Within 5m from the intersection



Reference: Chapter 2 Traffic Control

15.

Playground Zones hours are:

- A. 8:30 AM until 1 hour after sunset
- B. 7 AM to 9 PM
- C. Only from April 1st to October 31st
- D. 8 AM to 4 PM



BLUE CAR
DRIVING SCHOOL LTD.

15.

Playground Zones hours are:

- A. 8:30 AM until 1 hour after sunset
- B. 7 AM to 9 PM
- C. Only from April 1st to October 31st
- D. 8 AM to 4 PM



Reference: Chapter 2 Traffic Control

16.

Which statement is false when in a construction zone:

- A. Speed fines doubles when workers are present
- B. You must obey flag persons
- C. Construction zone speed limits are not in effect if there is no workers present
- D. Construction zone speed limits are always in effect



BLUE CAR
DRIVING SCHOOL LTD.

16.

Which statement is false when in a construction zone:

- A. Speed fines doubles when workers are present
- B. You must obey flag persons
- C. Construction zone speed limits are not in effect if there is no workers present
- D. Construction zone speed limits are always in effect

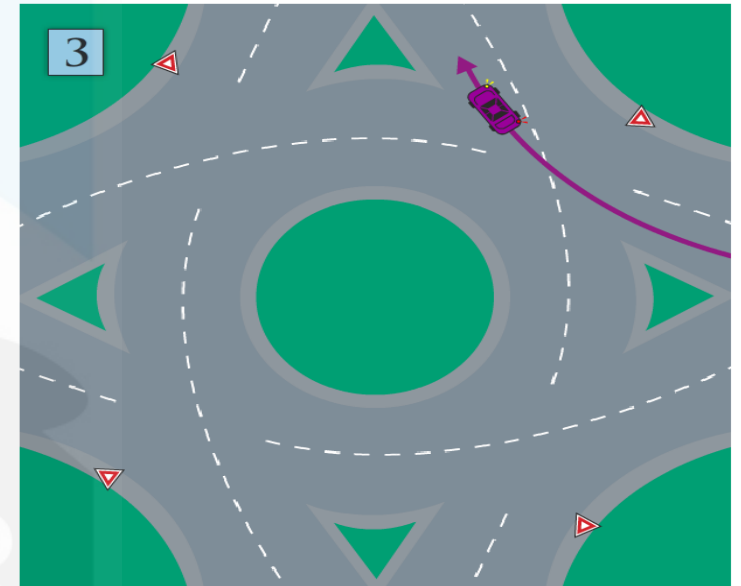


Reference: Chapter 2 Traffic Control

17.

In a two-lane traffic circle:

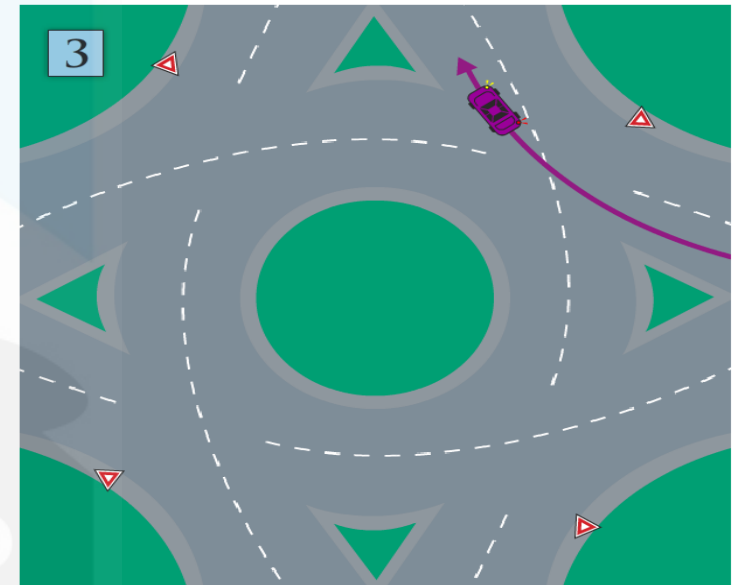
- A. Drivers on the right must yield to the left
- B. There is no yielding
- C. Drivers in the circle must yield to those entering
- D. Drivers on the left must yield to the right



17.

In a two-lane traffic circle:

- A. Drivers on the right must yield to the left
- B. There is no yielding
- C. Drivers in the circle must yield to those entering
- D. Drivers on the left must yield to the right




Reference: Chapter 4 Intersections and Turns

18.

How much distance should there be between you and the car ahead:

- A. 2 seconds if road conditions are good
- B. 5 car lengths if conditions are good
- C. 3 car lengths
- D. 6 seconds




18.

Reference: Chapter 7 Responsible Driving

How much distance should there be between you and the car ahead:

- A. 2 seconds if road conditions are good
- B. 5 car lengths if conditions are good
- C. 3 car lengths
- D. 6 seconds



19.

What are considered distractions while driving:

- A. Programming a GPS
- B. Grooming
- C. Writing
- D. All of the above



BLUE CAR
DRIVING SCHOOL LTD.

19.

What are considered distractions while driving:

- A. Programming a GPS
- B. Grooming
- C. Writing
- D. All of the above

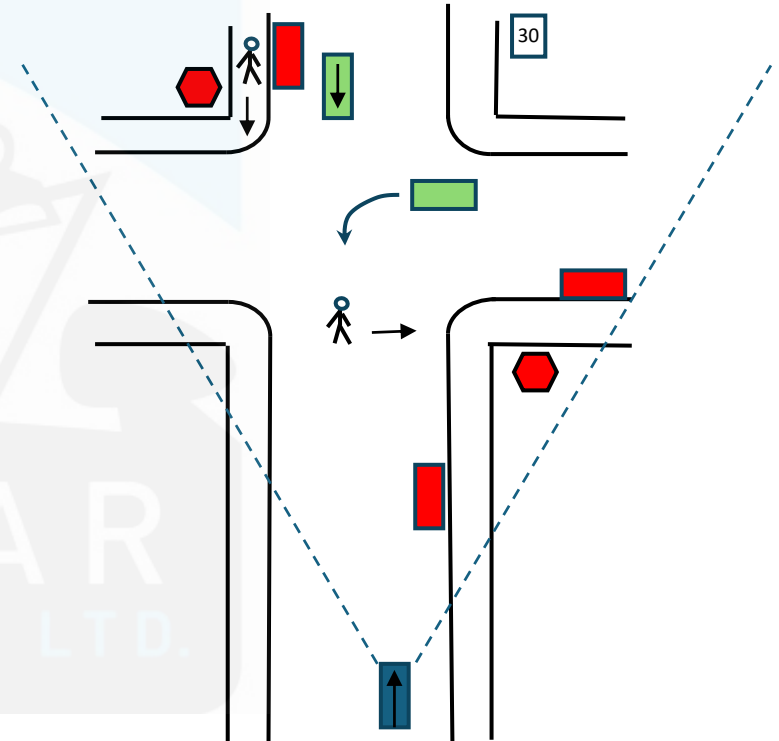


Reference: Chapter 7 Responsible Driving

20.

How far ahead in an urban area should the driver be scanning:

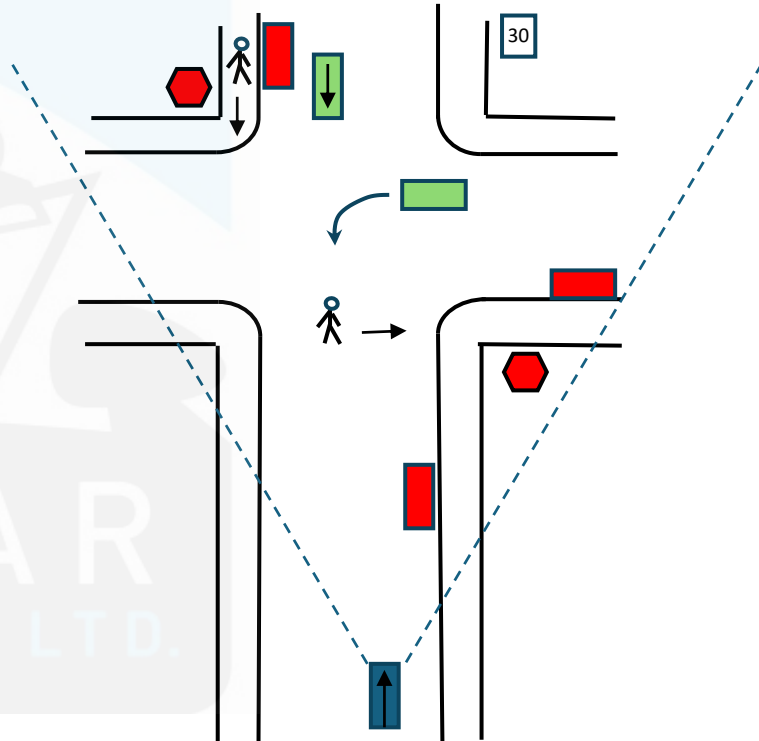
- A. 12-15 seconds ahead
- B. 300m
- C. 1-1.5 city blocks
- D. A and C



20.

How far ahead in an urban area should the driver be scanning:

- A. 12-15 seconds ahead
- B. 300m
- C. 1-1.5 city blocks
- D. **A and C**

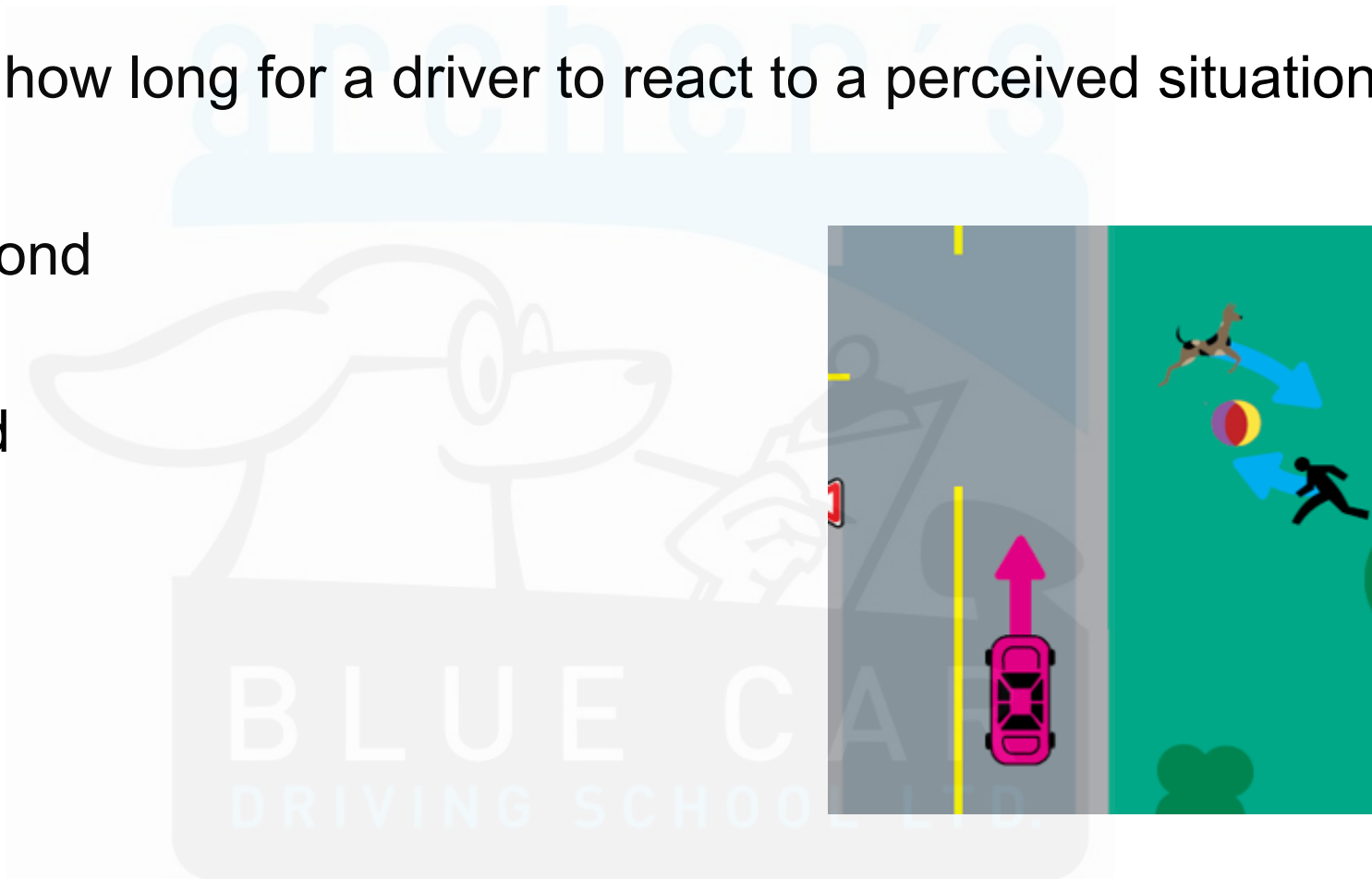


Reference: Chapter 7 Responsible Driving

21.

It takes about how long for a driver to react to a perceived situation:

- A. $\frac{3}{4}$ of a second
- B. 1 second
- C. 1.5 second
- D. 2 Seconds

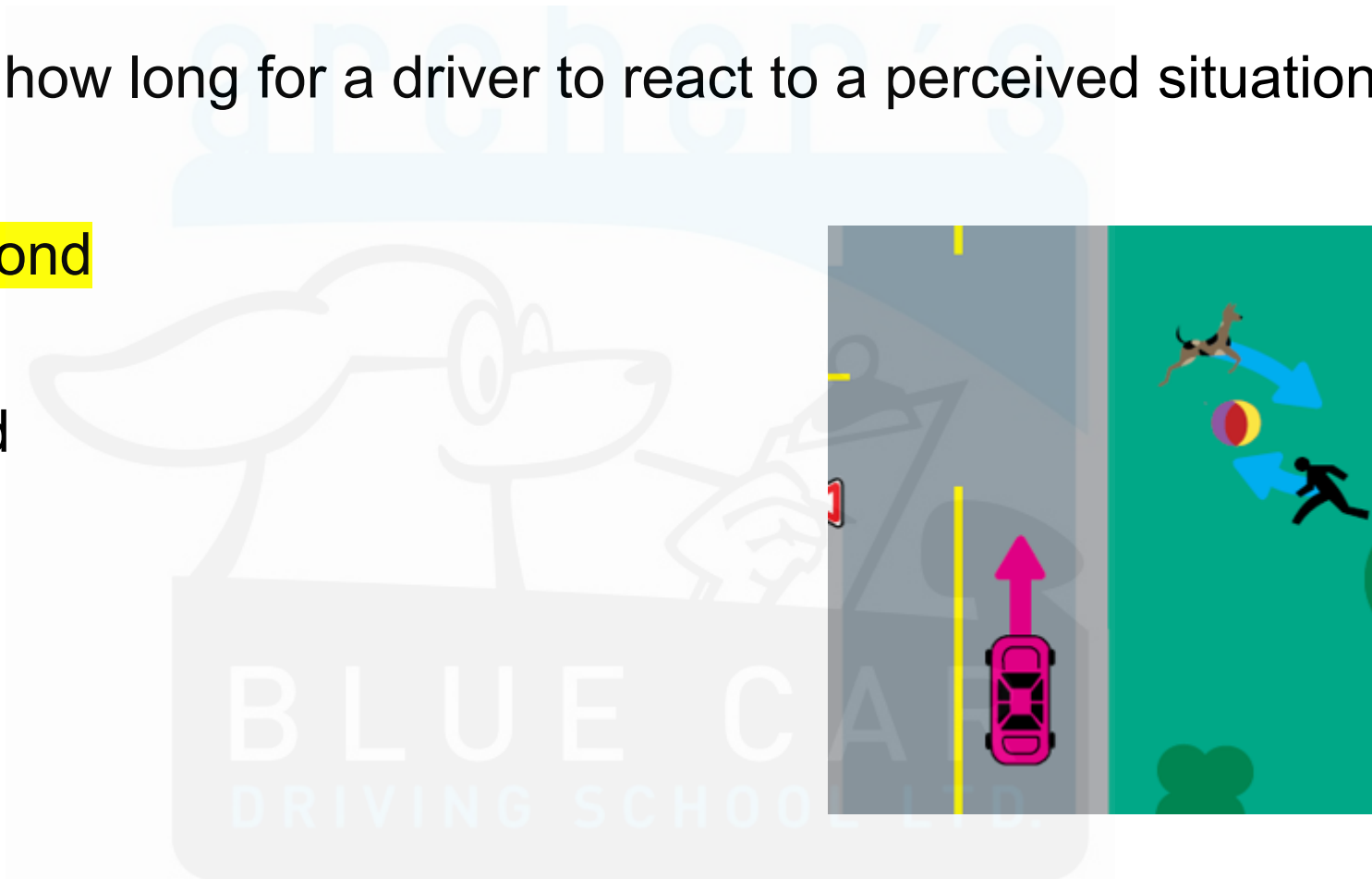


Reference: Chapter 3 Basics of Driving

21.

It takes about how long for a driver to react to a perceived situation:


- A. $\frac{3}{4}$ of a second
- B. 1 second
- C. 1.5 second
- D. 2 Seconds



22.

Which of these could be considered impairment:

- A. After consuming a certain amount of alcohol
- B. When being very tired
- C. Taking medication that cause drowsiness such as Gravol
- D. All of the above




BLUE CAR
DRIVING SCHOOL LTD.

22.

Which of these could be considered impairment:

- A. After consuming a certain amount of alcohol
- B. When being very tired
- C. Taking medication that cause drowsiness such as Gravol
- D. All of the above



Reference: Chapter 9 Driving within the Law

23.

This sign indicate:

- A. This vehicle travels less than 30 KPH
- B. This vehicles stops frequently
- C. This vehicle travels less than 40 KPH
- D. Only pass this vehicle on the left when safe



23.

This sign indicate:

- A. This vehicle travels less than 30 KPH
- B. This vehicles stops frequently
- C. **This vehicle travels less than 40 KPH**
- D. Only pass this vehicle on the left when safe

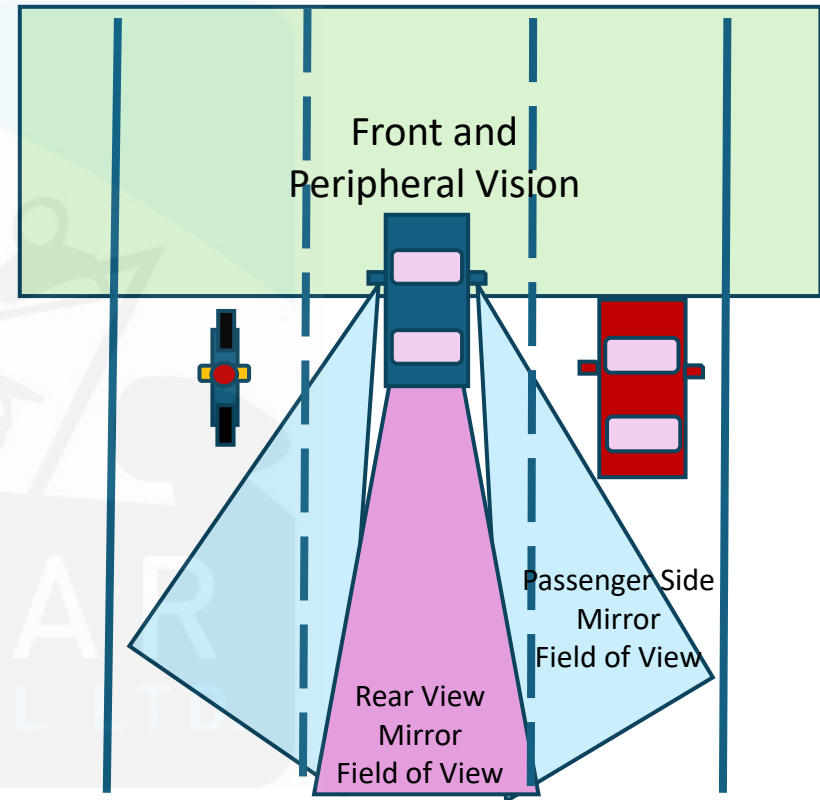


Reference: Chapter 2 Traffic Control

24.

When should you check your blind spot:

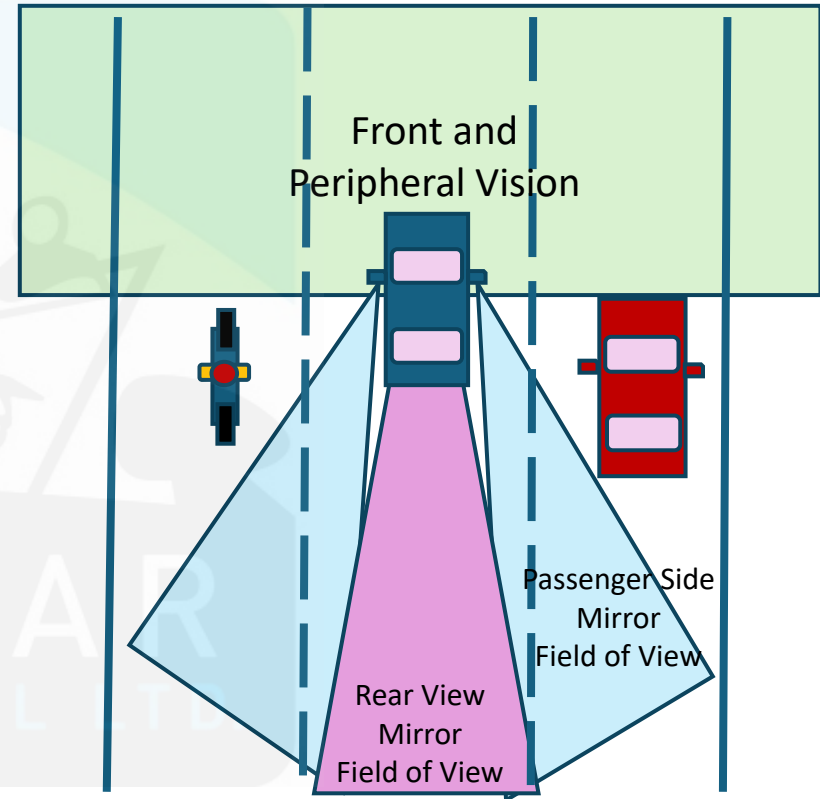
- A. When merging
- B. When turning
- C. When changing lanes
- D. All of the above



24.

When should you check your blind spot:

- A. When merging
- B. When turning
- C. When changing lanes
- D. All of the above



Reference: Chapter 3 Basics of Driving

25.

Driving is:

- A. A personal right
- B. A legal obligation
- C. Both A and B
- D. An earned privilege



25.

Driving is:

- A. A personal right
- B. A legal obligation
- C. Both A and B
- D. **An earned privilege**




BLUE CAR
DRIVING SCHOOL LTD.

26.

A left turn on red light is allowed when:


- A. NEVER!
- B. If it's clear of oncoming traffic and pedestrians
- C. Turning from a one-way street onto a one-way street
- D. If there is no signs prohibiting it



26.

A left turn on red light is allowed when:

- A. NEVER!
- B. If it's clear of oncoming traffic and pedestrians
- C. Turning from a one-way street onto a one-way street
- D. If there is no signs prohibiting it



27.

When merging on the highway:

- A. The car already on the highway has the right of way
- B. The car that is merging has the right of way
- C. First to get to the merge point has the right of way
- D. Merging is a shared responsibility and both vehicles must cooperate



27.

When merging on the highway:


- A. The car already on the highway has the right of way
- B. The car that is merging has the right of way
- C. First to get to the merge point has the right of way
- D. Merging is a shared responsibility and both vehicles must cooperate



28.

Which statement about passing is false:


- A. Speeding is allowed if passing on a primary or secondary highway
- B. Passing is not allowed in playground or school zones during active hours
- C. Passing is allowed if the lines are broken
- D. Drivers must slow down to 60 KPH when passing an emergency vehicle, workers or tow vehicles in the lane adjacent.



28.

Which statement about passing is false:

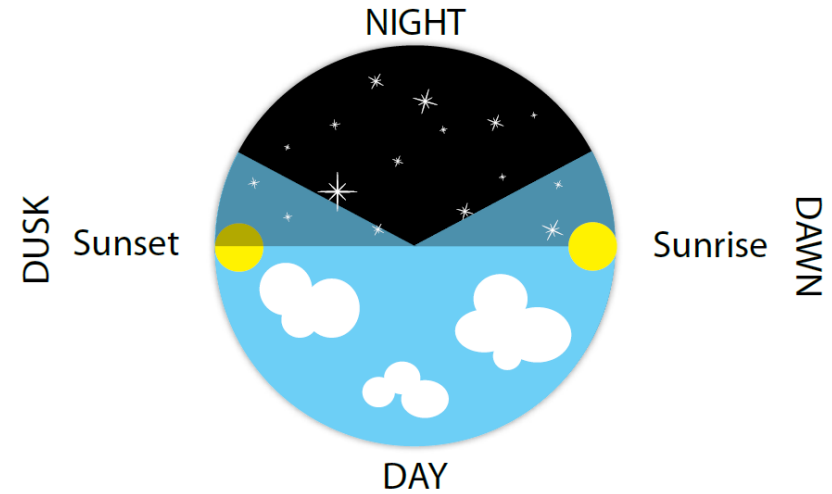
- A. Speeding is allowed if passing on a primary or secondary highway
- B. Passing is not allowed in playground or school zones during active hours
- C. Passing is allowed if the lines are broken
- D. Drivers must slow down to 60 KPH when passing an emergency vehicle, workers or tow vehicles in the lane adjacent.



29.

When are you required to turn on your headlights?

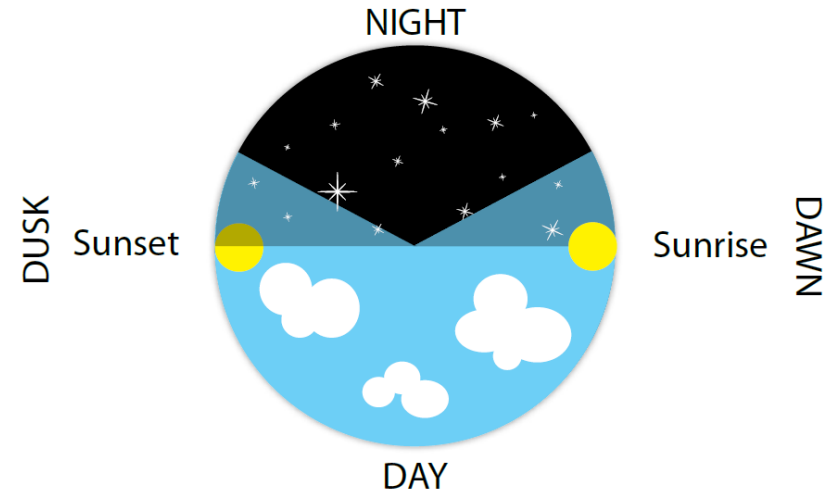
- A. Within one hour after sunset
- B. When it's raining or snowing
- C. When visibility conditions fall below 150m
- D. A and C are correct



29.

When are you required to turn on your headlights?

- A. Within one hour after sunset
- B. When it's raining or snowing
- C. When visibility conditions fall below 150m
- D. **A and C are correct**



Thanks for doing our practice test!

If you are still struggling to pass your learner's test, consider taking one of our in-person classroom sessions!

Good Luck!

Archer's Blue Car Driving School:
office@archersbluecar.ca
Call or Text: 587 990-2583
www.archersbluecar.ca

